














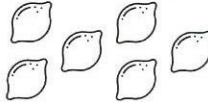
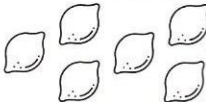




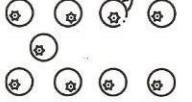


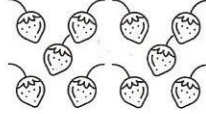
Mathématiques

Les doubles










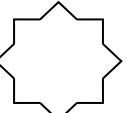





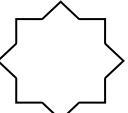


Complète les tableaux :

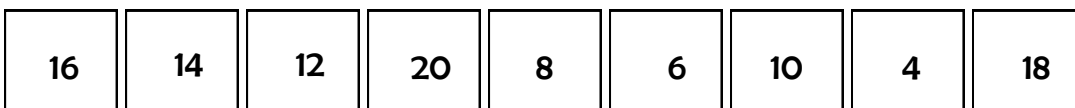
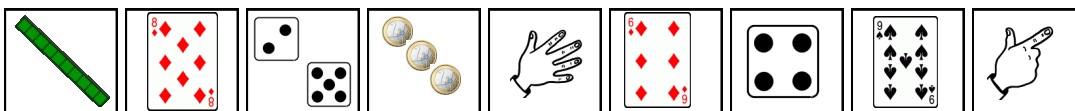
  $1 + 1 = 2$
  $2 + \dots = 4$
  $3 + \dots = 6$
  $\dots + \dots = 8$
  $\dots + \dots = 10$

  $6 + 6 = \dots$
  $7 + 7 = \dots$
  $\dots + \dots = 16$
  $\dots + \dots = 18$
  $10 + 10 = \dots$

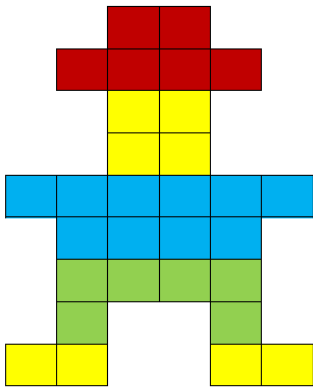
A chacun son double ! Complète le plus rapidement possible !

 → 	 → 	 → 	 → 
 → 	 → 	 → 	 → 

Relie chaque étiquette à son double



Observe ce bonhomme et complète le tableau



	Pour construire, un bonhomme, il me faut...	Pour en construire 2, il me faut le double de pièces donc...
jaune		
vert		
bleu		
rouge		

Lis le début de cette recette et complète le tableau :

Gâteau au yaourt

Ingrédients

1 pot de yaourt
 3 pots de farine
 2 pots de sucre
 1 sachet de levure
 3 oeufs

	Pour préparer un gâteau, il te faut...	Pour en faire 2, il me faut le double d'ingrédients donc...
yaourt		
farine		
sucre		
levure		
oeufs		

Complète les bulles de chaque personnage :

J'ai 6 ans !

Mon âge est le double du tien. J'ai donc ans.

J'ai cueilli un bouquet de 8 fleurs pour ma maman !

J'en ai cueilli le double ! J'ai donc cueilli fleurs.

Dans ma classe, il y a 10 filles !

Dans la mienne, il y en a le double ! Il y a donc filles.