

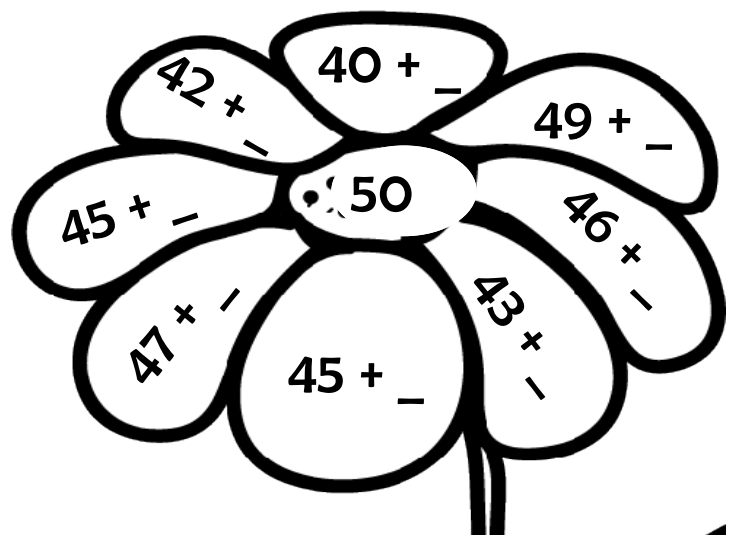
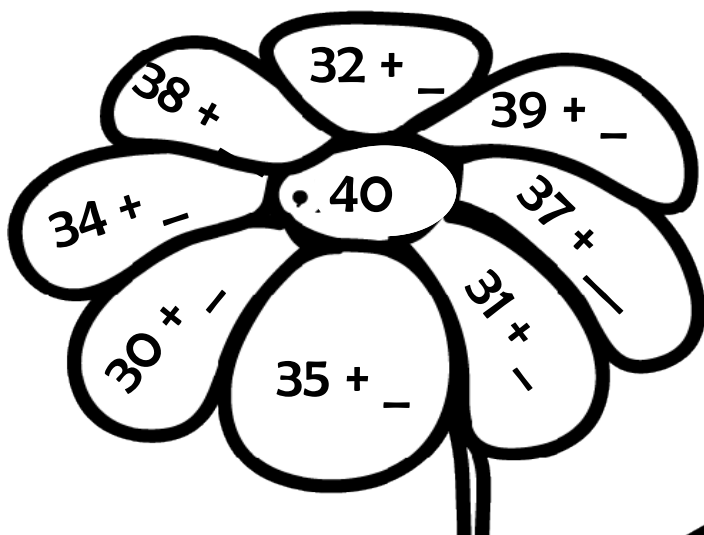
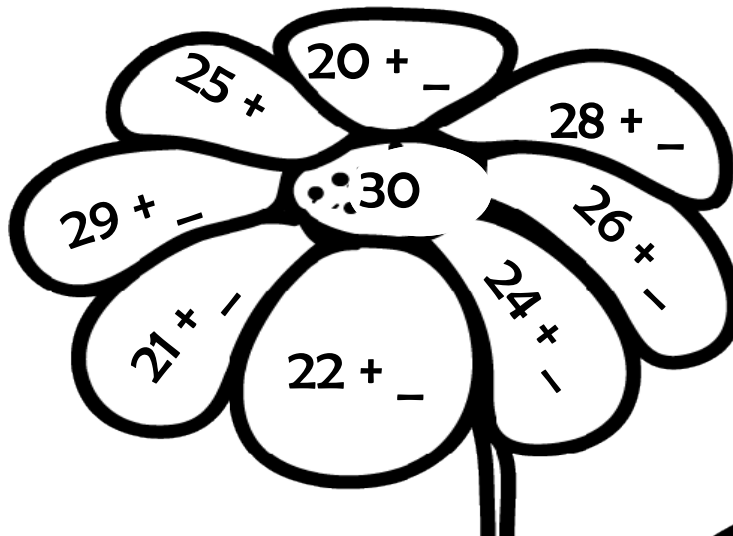




Mathématiques

Entraînement à l'addition



Complète les additions pour que tous les pétales aient le résultat demandé :



$26 + 25$

	d	u
+	.	.
	.	.
	.	.

$34 + 56 =$

	d	u
+	.	.
	.	.
	.	.

$56 + 43 =$

	d	u
+	.	.
	.	.
	.	.

$31 + 42 + 12 =$

	d	u
	.	.
+	.	.
+	.	.
	.	.

$54 + 12 + 11 =$

	d	u
	.	.
+	.	.
+	.	.
	.	.

$20 + 45 + 23 =$

	d	u
	.	.
+	.	.
+	.	.
	.	.

$24 + 16 + 20 =$

	d	u
	.	.
+	.	.
+	.	.
	.	.

$12 + 17 + 11 =$

	d	u
	.	.
+	.	.
+	.	.
	.	.

$16 + 12 + 42 =$

	d	u
	.	.
+	.	.
+	.	.
	.	.