



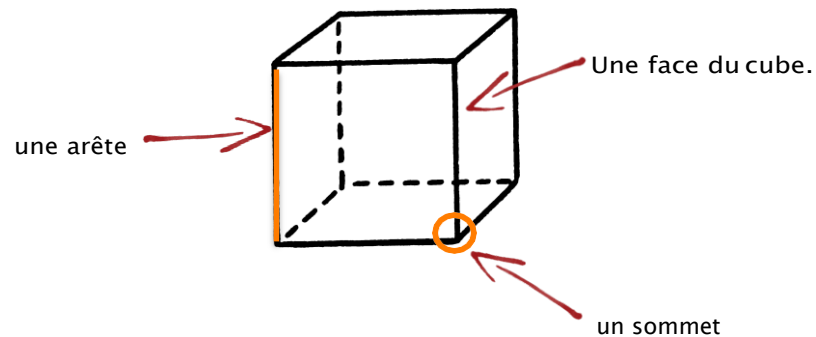
## Les solides (1)

**Le cube** est **un solide**.



**Un cube** a : - 6 faces.

Toutes ses faces sont des carrés.




**Le pavé droit** est **un solide**.


Il a 6 faces et chaque face est un rectangle .



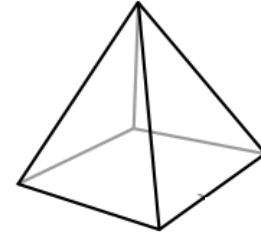
ou il a 4 faces rectangulaires et 2 faces carrées .



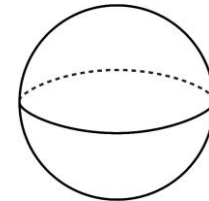
## Les solides (2)



**Une pyramide.**



**Une boule**



**Un cylindre**



**Un cône**

